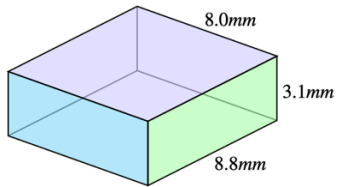
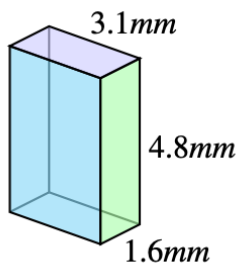


1. Find the **volume** of each rectangular prism below. Find the **perimeter** of each **purple** side of the rectangular prism. Find the **area** of each **blue** side of the rectangular prism.

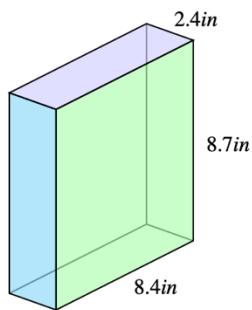
a)



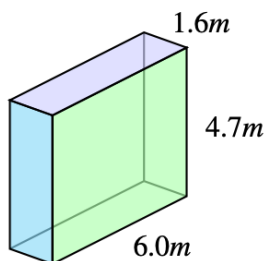
b)



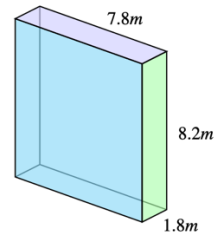
c)



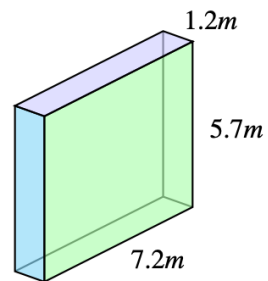
d)



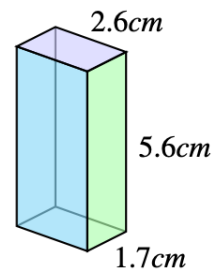
e)



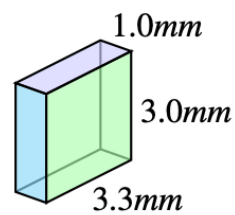
f)



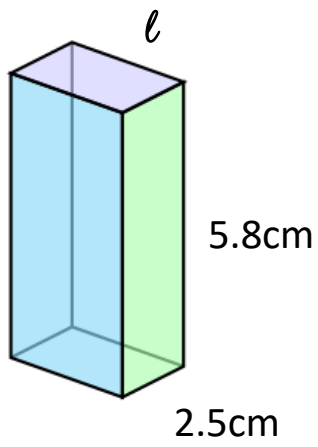
g)



h)



BONUS:



$$V = 57.13 \text{ cm}^3$$

$$\ell =$$

$$P =$$

$$A =$$